

Finding the difference

How many pounds less does Ella M have?



Ella M



Finn

How many pence less does Zara have?




Zara

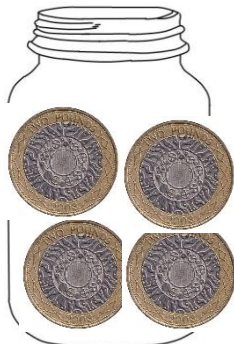


Oliver B

How much less money does Jack H have?



Jack H




Isaac

How much less money does Ava have?



Charlie S



Ava

Taro has £2 and 15p

Anne has £2 and 40p

How much more does Anne have than Taro?

Austin has £6 and 67p

Saanwi has £3 and 47p

How much more does Austin have than Saanwi?

Extra challenge

What could Oscar have?



How many different answers can you find?