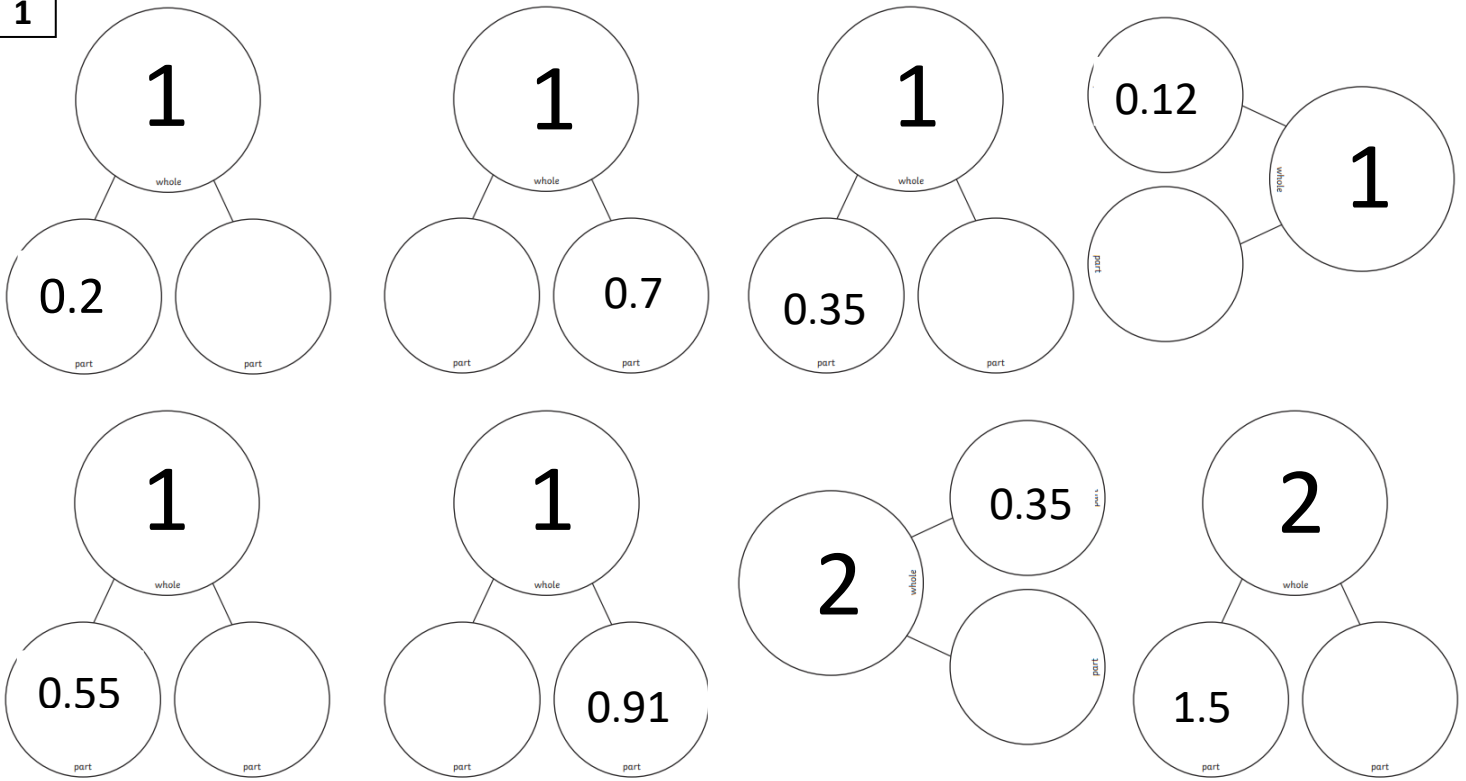


# Monday Maths Activity Sheet- Making a Whole

1



2

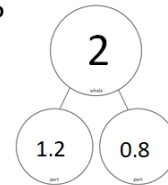
## Mini Investigation:

How many ways can you make 1 whole?  
Show your different decimal combinations on a Part-Part-Whole model. Find at least 20! E.g.



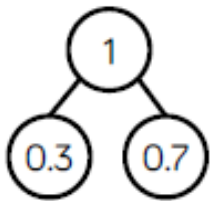
Optional challenge level - Can you find at least 20 different ways to make 2 wholes?

E.g.

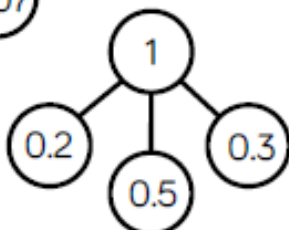
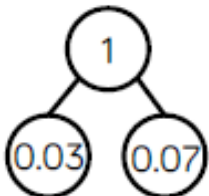


3

Which part whole model does not match the hundred square?



1	2	3	4	5	6	7	8	9	10
11	12	13	14	15	16	17	18	19	20
21	22	23	24	25	26	27	28	29	30
31	32	33	34	35	36	37	38	39	40
41	42	43	44	45	46	47	48	49	50
51	52	53	54	55	56	57	58	59	60
61	62	63	64	65	66	67	68	69	70
71	72	73	74	75	76	77	78	79	80
81	82	83	84	85	86	87	88	89	90
91	92	93	94	95	96	97	98	99	100



Reasoning challenge:

---

---

---

---

---

---

---

---

Explain your answer.