

Thursday

Subtracting from whole amounts

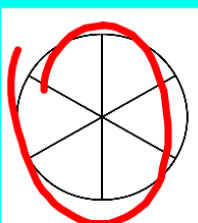
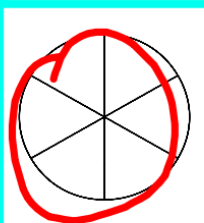
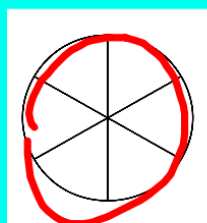
$$\frac{6}{6} = 1$$



$$\frac{12}{6} = 2$$

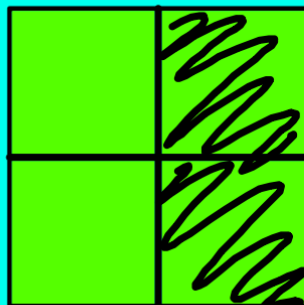




$$\frac{18}{6} = 3$$




Use a diagram to calculate:

$$3 - \frac{2}{4} = 2 \frac{2}{4}$$



Use a diagram to calculate:

$$3 - \frac{7}{9} = 2\frac{2}{9}$$



Use a number line to find the difference between 2 and $\frac{3}{5}$

