





1)

Record the time of each activity in digital format.

Netball	 PM	
Football	 AM	
Rock climbing	 PM	
Roller disco	 AM	

2) Akeela converts the analogue time to digital format.

Here is her answer.



22 : 02

Explain what Akeela has done wrong.  
What should the digital time be?

3) Jack arrives at the train station at the time shown.

Which trains could he catch?



Destination	Departs
New Pudsey	09 : 25 AM
Bramley	09 : 42 AM
Leeds	10 : 03 AM
York	07 : 10 AM

How long will Jack have to wait for each train?