

How many hats are there?



There are.....hats in total

How many bikes are there?





There are.....bikes in total.

How many cakes are there?




There are.....cakes in total.

How many counters are there?



There are.....counters in total.

How many numicon are there?



There are.....numicon in total.

How many coins are there?



There are.....coins.

How many Fish are there?



There are.....Fish.

How many apples are there?



There are.....apples.

How many kittens are there?



There are.....kittens.

How many lollypops are there?



There are.....lollypops.