



Place Value (Part 1)

One more, One less

Write the numbers that come before and after.



More than, Less than

Activity 1


Copy out the words in the table in the boxes below. You will need them for the next activity.





<i>More Than</i>	<i>Less than (fewer)</i>	<i>Equal to</i>	<i>Most</i>	<i>Least</i>

Activity 2

Here are five cats.

- In each of the boxes below, can you say if the number of animals in the box is fewer than 5, more than 5 or equal to 5.
- When you have finished, decide which box has the most animals in it, and write **MOST** in the box.
- Next, decide which box has the least animals in it, and write **LEAST** in the box.



			
<i>e.g. Fewer than 5</i>			
