

Place Value (Part 2)

Representing numbers on a number line

Draw an arrow to show the following numbers on the number line. There is an example below to show you what to do.

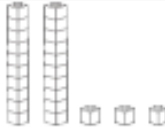
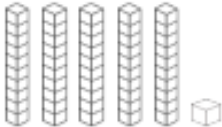
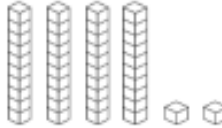


Be careful. These number lines don't always start at 0 and end at 100!



Reading and writing numbers to 100

Can you fill out any missing boxes for each of the numbers below? The first one has been done for you to show you what to do.

Numerals	Number in Words	Tens	Ones	Illustration
23	twenty three	2	3	
17	seventeen			
34				
	fifty six	5	6	
		5	1	
49				
	eighty three			
				
		7	7	

Challenge

Numerals	Number in Words	Hundreds	Tens	Ones	Illustration
					